
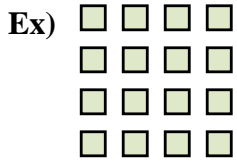




Write each array as an addition problem and solve.



Answers

Ex. 4+4+4+4=16

1. \_\_\_\_\_

2. \_\_\_\_\_

3. \_\_\_\_\_

4. \_\_\_\_\_

5. \_\_\_\_\_

6. \_\_\_\_\_

7. \_\_\_\_\_

8. \_\_\_\_\_

9. \_\_\_\_\_


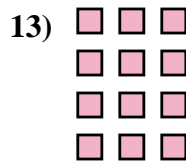
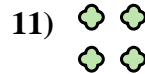
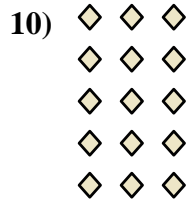

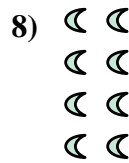


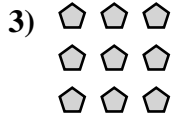
10. \_\_\_\_\_

11. \_\_\_\_\_

12. \_\_\_\_\_


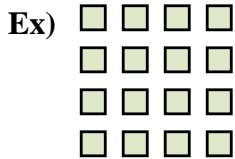
13. \_\_\_\_\_

14. \_\_\_\_\_





Write each array as an addition problem and solve.



Answers

Ex.  $4+4+4+4=16$

1.  $5+5+5+5=20$

2.  $5+5+5+5+5=25$

3.  $3+3+3=9$

4.  $5+5=10$

5.  $4+4+4+4+4=20$

6.  $2+2+2=6$

7.  $2+2+2+2+2=10$

8.  $2+2+2+2=8$

9.  $3+3=6$

10.  $3+3+3+3+3=15$

11.  $2+2=4$

12.  $4+4+4=12$

13.  $3+3+3+3=12$

14.  $5+5+5=15$

